

Doubles and halves

.....

1. $2 + 2 = \square$

2. Double 3

3. Half of 8

4. $10 = \square + \square$

5. Double 1

6. $4 + 4 = \square$

7. $2 = \square + \square$

8. Half of 6

9. $0 + 0 = \square$

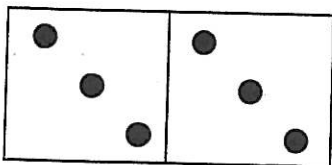
10. Double 5

11. Half of 2

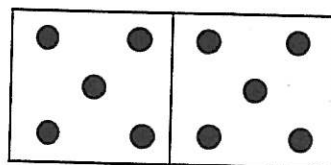
12. $3 + 3 = \square$



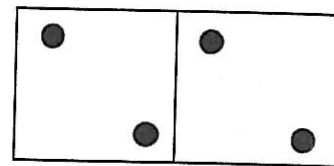
Copy and complete these sentences.



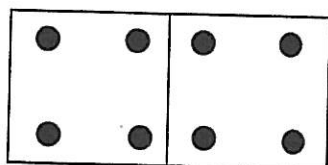
Double \square is \square



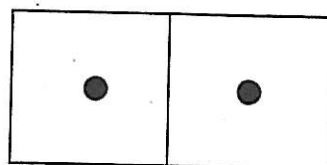
Double \square is \square



Double \square is \square



Double \square is \square



Double \square is \square

.....